



**HOLIDAY  
HOMEWORK  
OF CLASS  
2ND.**



I AM

A ...



BOY



GIRL

MY NAME IS \_\_\_\_\_

I'M ...



\_\_\_\_\_

YEARS OLD.



**ENGLISH**

Name : \_\_\_\_\_

## Caterpillars

Caterpillars eat leaves. They have a soft body. They have pine on their body. They breathe through little holes on the sides of their body. They have many friends and they love to play with them.



**1) What does Caterpillars eat?**

- a) chocolate    b) leaves    c) fruits

**2) Who has a soft body?**

- a) deer    b) cat    c) caterpillar

**3) Caterpillars have \_\_\_\_\_ on their body.**

- a) spike    b) pine    c) horn

**4) Caterpillars breathe through \_\_\_\_\_.**

- a) holes    b) heart    c) lungs

## My Book

My name is Shelly. My teacher gave me a story book today. I like the pictures of the book. I read the story book before sleeping. I keep my book safe in the bookshelf.



- 1. Who gave Shelly the story book?**
  - a. mom
  - b. dad
  - c. teacher
- 2. What did Shelly like about the book?**
  - a. cover
  - b. pictures
  - c. color
- 3. What did Shelly read before sleeping?**
  - a. storybook
  - b. novel
  - c. comic
- 4. Where did she keep her book?**
  - a. table
  - b. bookshelf
  - c. drawer

# Articles Worksheet

<b>a</b>	<b>an</b>	<b>the</b>
----------	-----------	------------

**Complete the sentence with correct article:**

1. \_\_\_\_\_ plates are on the dining table.
2. I want \_\_\_\_ burger.
3. There is \_\_\_\_ orange on the table.
4. \_\_\_\_\_ students are welcoming the chief guest.
5. He is in \_\_\_\_ rush.
6. I have got \_\_\_\_\_ plan for that.
7. She is always smiling and kind to \_\_\_\_\_ students.
8. A teacher is \_\_\_\_\_ important person in everyone's life.
9. He is \_\_\_\_ best in this subject.
10. There was \_\_\_\_\_ lot of fun while playing cricket.

# 'THESE' OR 'THOSE'

Look at the pictures and fill in the blanks using 'these' or 'those':

1) \_\_\_\_\_ are   \_\_\_\_\_.

2) \_\_\_\_\_ are  \_\_\_\_\_ .

3) \_\_\_\_\_ are   \_\_\_\_\_.

4) \_\_\_\_\_ are   \_\_\_\_\_.

5) \_\_\_\_\_ are  \_\_\_\_\_ .

6) \_\_\_\_\_ are   \_\_\_\_\_.

7) \_\_\_\_\_ are  \_\_\_\_\_ .

8) \_\_\_\_\_ are  \_\_\_\_\_ .



**COMPUTER**





MONITOR

MOUSE

KEYBOARD

CPU






1. Name the three types of computers.
2. Write any four places where computers are used.
3. Name the main parts of a computer.
4. Which part of a computer is known as the brain of the computer?
5. Fill in the blanks:
  - a. Mouse is also known as a \_\_\_\_\_.
  - b. Microphone is an \_\_\_\_\_ device.
  - c. \_\_\_\_\_ is an output device.
  - d. A \_\_\_\_\_ is used to do calculations in the computer.
  - e. \_\_\_\_\_ key is used to type capital letters.
  - f. Monitor is an \_\_\_\_\_ device.

Name: \_\_\_\_\_

Grade : \_\_\_\_\_

Date: \_\_\_\_\_

## 1. Complete the table:

	Name of the device	Input/Output
	_____	_____
	_____	_____
	_____	_____
	_____	_____
	_____	_____

## 2. Identify the hardware and the software and tick (✓) the correct column.

	Hardware	Software		Hardware	Software
					
					
					

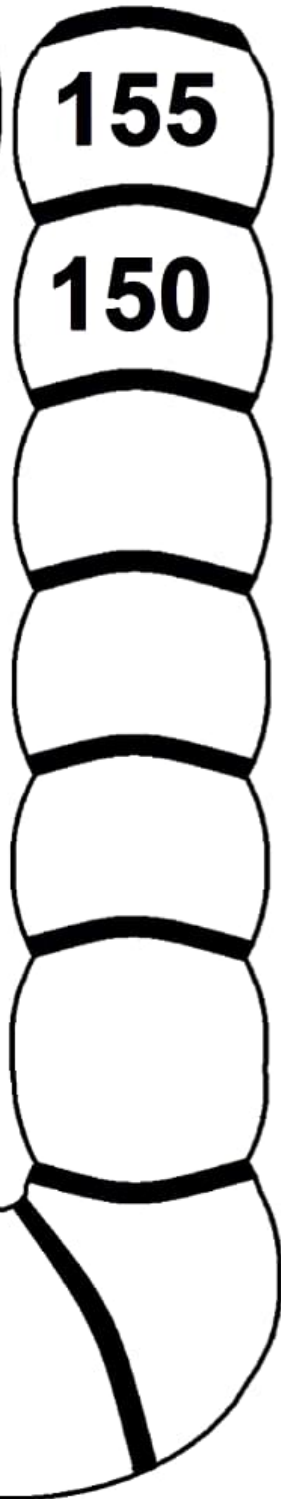

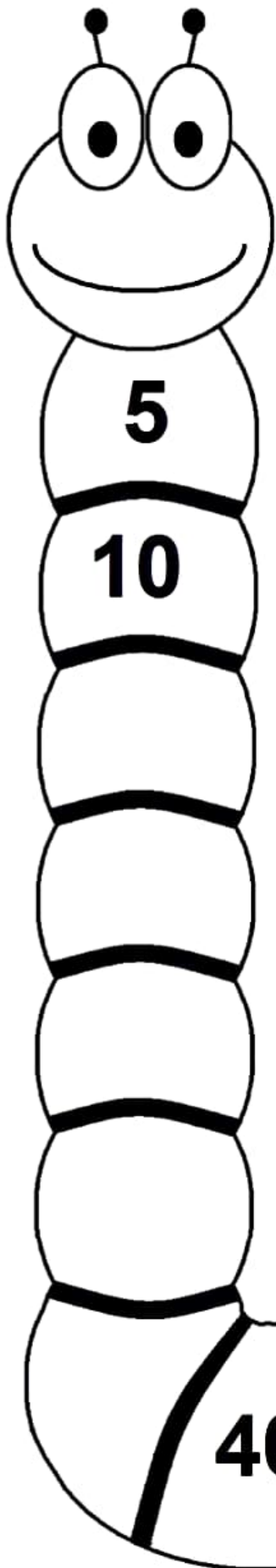


# MATHS

Name

Date

# Count by 5s.



## ADDITION WORKSHEETS FOR GRADE 2

Add the numbers and find out the answer.

1

$$\begin{array}{r} 5 \\ + 7 \\ \hline \\ \hline \end{array}$$

2

$$\begin{array}{r} 0 \\ + 8 \\ \hline \\ \hline \end{array}$$

3

$$\begin{array}{r} 7 \\ + 3 \\ \hline \\ \hline \end{array}$$

4

$$\begin{array}{r} 3 \\ + 4 \\ \hline \\ \hline \end{array}$$

5

$$\begin{array}{r} 8 \\ + 9 \\ \hline \\ \hline \end{array}$$

6

$$\begin{array}{r} 6 \\ + 3 \\ \hline \\ \hline \end{array}$$

7

$$\begin{array}{r} 5 \\ + 6 \\ \hline \\ \hline \end{array}$$

8

$$\begin{array}{r} 0 \\ + 2 \\ \hline \\ \hline \end{array}$$

9

$$\begin{array}{r} 7 \\ + 5 \\ \hline \\ \hline \end{array}$$

**Write in increasing order.**

(1) 48, 75, 32, 68, 48, 58

\_\_\_\_\_

(2) 72, 84, 43, 100, 32, 99

\_\_\_\_\_

**Write in decreasing order.**

(1) 92, 48, 85, 62, 39, 100

\_\_\_\_\_

(2) 14, 98, 76, 85, 45, 68

\_\_\_\_\_

**Counting backwards write 69 – 58.**

(1) 69 \_\_\_\_\_

(2) \_\_\_\_\_

**Put > or < sign in the blank space.**

(1)  $60 + 7$  \_\_\_\_\_  $48$                        $90 - 4$  \_\_\_\_\_  $85$

(2)  $33 + 1$  \_\_\_\_\_  $27$                        $70 - 7$  \_\_\_\_\_  $66$

(3)  $46 + 2$  \_\_\_\_\_  $53$                        $50 - 5$  \_\_\_\_\_  $50$



**HINDI**



# हिंदी वर्कशीट - Class 2

लापता अक्षरों का पता लगाएं :



ग \_ ला



\_ श्मा



ऊ \_



म \_ का



खरगो \_

ज \_ ज



\_ पहार



झ \_ ना



\_ मल



टो \_ री



# मात्रा की यात्रा

— की मात्रा सही स्थान पर लगाओ।

...	...
मला	जब
...	...
सना	दश
...	...
पड़ा	मरा
...	...
लना	पड़
...	...
खल	बंटा
...	...
कला	बसन
...	...
शर	पज
...	...
	रल

चित्र देखकर दिए गए शब्दों की सहायता से खाली स्थान भरिए :



तितलियाँ

कार

उपवन

गेंद

झूला

1.  में बच्चे खेल रहे हैं ।
2. एक लड़की  झूल रही है ।
3. दो गुलाबी रंग की  उड़ रही है ।
4. टोपी पहना एक लड़का  से खेल रहा है ।
5. पीली टोपी पहना लड़का  में बैठा है ।



**URDU**

حرف الگے پڑ کریں۔

ت		پ		ا
	ق		ث	
ر		د		خ
	س		ر	
ع		ط		م
	ک		ل	
ہ		ن		س
			ی	

☆ واحد کے جمع لکھیے:

واحد	جمع
تارا	
باجا	
گنا	
جوتا	





**E. V. S**



A) WRITE 'H' FOR HEALTHY FOOD AND 'J' FOR JUNK FOOD



# My Body

Choose the correct answer and write in the blanks.

1. We see with our \_\_\_\_\_. (ears/eyes)
2. Our \_\_\_\_\_ help us to hear. (eyes/ears)
3. We have \_\_\_\_\_ sense organs. (six/five)
4. We can \_\_\_\_\_ with our nose. (smell/hear)
5. Our skin help us to \_\_\_\_\_ things. (taste/feel)
6. We listen to music with our \_\_\_\_\_. (eyes/ears)
7. We can \_\_\_\_\_ food with our tongue.  
(see/taste)
8. We watch cartoon with our \_\_\_\_\_.  
(ears/eyes)

**Q : 1 Choose the correct answer.**

1) Festival of lights

Holi

Diwali

Christmas

2) Festival of colours

Guruparv

Eid

Holi

3) Birth celebration of Jesus Christ

Christmas

Diwali

Eid



Enjoy your Holidays ★★🌸