

**K B PUBLIC SCHOOL**



**JAMMU**

Summer  
HOLIDAY



Homework





CLASS

3

# ENGLISH



Name: \_\_\_\_\_

# BOB THE FROG

Read the text THREE times and then answer the questions.



## Read it:

Bob is a frog. He is green with yellow spots. He has a long, sticky tongue that he uses to catch flies. He lives near a pond. Sometimes he goes into the water and sometimes he stays on the land. Bob has strong legs that he uses to hop. When Bob was a little baby he was called a tadpole.

## Answer it:

1. What is Bob?

---

2. What color is Bob?

---

3. What sort of tongue does Bob have?

---

4. What does Bob use his tongue for?

---

5. What was Bob called when he was little?

---

## SENTENCES

### A. Rearrange these groups of words to form sentences.

1. with sentences letters begin always capital

-----

2. grandmother's keys on are table the

-----

3. a Reeta skirt wearing is pink

-----

4. seven are in colours rainbow there a

-----

5. is bird peacock the national our

-----

### B. Look at the pictures and complete the sentences.



1. Kunal is -----



2. Tina is -----



Math

+ - x ÷



# Subtraction

## Solve the following word problems:

1. A cricket match ground could hold only 3468 people. 5800 people went to see a match. How many people were extra?  
.....

2. Bhola had Rs. 3975 with him. He spent Rs. 2987. How much money was left with him?  
.....

3. The sum of two numbers is 8756. If one of the numbers is 5978, find the other number?  
.....

## Subtract horizontally:

(a)  $1841 - 1330 =$  .....

(b)  $6492 - 3261 =$  .....

(c)  $7000 - 3999 =$  .....

(d)  $1573 - 984 =$  .....

(e)  $9384 - 6448 =$  .....

Rough Work

## Solve the following word problems:

(a) 
$$\begin{array}{r} 7399 \\ - 6125 \\ \hline \end{array}$$

(b) 
$$\begin{array}{r} 8320 \\ - 4110 \\ \hline \end{array}$$

(c) 
$$\begin{array}{r} 9276 \\ - 2043 \\ \hline \end{array}$$

(d) 
$$\begin{array}{r} 8793 \\ - 2489 \\ \hline \end{array}$$

(e) 
$$\begin{array}{r} 5409 \\ - 2198 \\ \hline \end{array}$$

(f) 
$$\begin{array}{r} 9000 \\ - 6738 \\ \hline \end{array}$$

**1. Read the number. What is the place value of the underlined digit?**

**a** 4821       **b** 3261       **c** 3827

**d** 5637       **e** 8409       **f** 2064

**g** 3956       **h** 3749       **i** 2690

**2. Write in expanded form.**

**a** 7824 = \_\_\_\_\_

**b** 3549 = \_\_\_\_\_

**c** 6042 = \_\_\_\_\_

**d** 8050 = \_\_\_\_\_

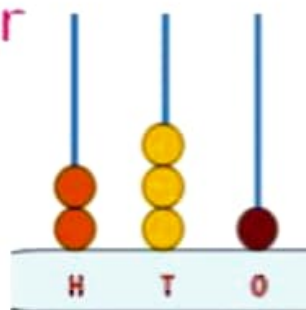
**e** 5097 = \_\_\_\_\_

**f** 4230 = \_\_\_\_\_

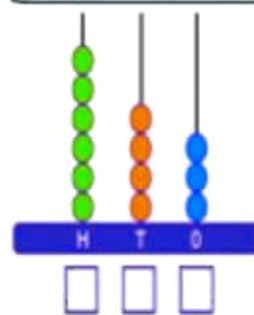
**g** 9371 = \_\_\_\_\_

Draw a line to match the number with its graphical representation

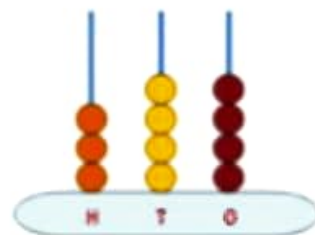
432



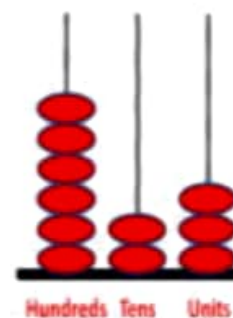
623



643



344



231





\*Write True or False for the following statements:

1. A potter needs only clay for making pot.

2. A potter needs clay and water for making pot.

3. Pots are baked in sunlight.

4. Pots are baked in kiln or fire.



5. A potter needs trowler to shape the pot.



6. A potter needs potter's wheel to

shape the pot.



Q.3) Identify the given images and name it.

**(Sweeper, Potter, Mechanic, Cook, Gardener)**

**DRAG & DROP**

a) Who cooks food in the hotel?



-----

b) Who repairs cars & scooters?



-----

c) Who looks after the garden?



-----

d) Who makes earthen pots?



-----

e) Who keeps your city clean?



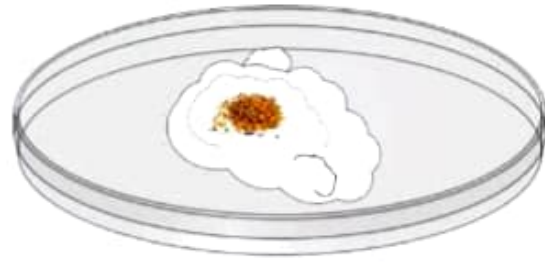
-----

# Plants


**A. In which of the following will the mustard seeds germinate?**



Mustard seeds



Mustard seeds on moist cotton



Mustard seeds in water



Mud with mustard seeds

**B. Fill up the blanks: (Use hint box)**

carbohydrates    proteins    fruits    vegetables  
plants    root    germination

1. Part of plant below the ground is \_\_\_\_\_ system.
2. Growing of seeds into root and shoot is called \_\_\_\_\_.
3. Major part of food comes from \_\_\_\_\_.
4. Grains give us \_\_\_\_\_.
5. Pulses are rich in \_\_\_\_\_.
6. Minerals and vitamins are given by \_\_\_\_\_ and \_\_\_\_\_.

**C. Match the following:**

Grapevine

Neem

Rose

Tulsi (Basil)

Tree

Shrub

Climber

Herb

हिंदी



## Hindi Worksheet

### रिक्त स्थान भरो:

१. \_\_\_\_\_ उड़ती है।  
(चिड़िया , हिरन)
२. आसमान \_\_\_\_\_ है।  
( नीला , हरा)
३. राधा \_\_\_\_\_ जा।  
( अचार , बाज़ार)
४. रमन \_\_\_\_\_ पढ़।  
( तकिया , किताब)
५. समीर \_\_\_\_\_ से सामान ला।  
( दुकान, चुनरी)

लापता अक्षरों का पता लगाएं :



ग \_ ला



\_ श्मा



ऊ \_



म \_ का



खरगो \_

ज \_ ज



\_ पहार



झ \_ ना



\_ मल



टो \_ री



उचित संज्ञा से खाली स्थान भरिए -

तितली	पतंग	घर	दिल्ली	कोयल
शेर	आसमान	बच्चे	फल	मछली

1. जंगल का राजा \_\_\_\_\_ है।
2. फूल पर \_\_\_\_\_ बैठी है।
3. मोहन का \_\_\_\_\_ है।
4. पिताजी बाज़ार से \_\_\_\_\_ लाए हैं।
5. बगीचे में \_\_\_\_\_ खेल रहे हैं।
6. रमेश \_\_\_\_\_ उड़ा रहा है।
7. \_\_\_\_\_ नीला है।
8. तालाब में \_\_\_\_\_ तैर रही है।
9. \_\_\_\_\_ गाना गा रही है।
10. लालकिला \_\_\_\_\_ में है।



ذکر کے مؤثر کی نشاندہی کریں۔

مؤثر	ذکر
دھوئیں	غلام
تاجن	دھوپ
بندی	عزیز
گلاب	عابد
پوزمی	تاج
عابد	بندہ
عزیز	پوزحہ
استانی	پوپا
پوہگی	استاد

سوال :- درج ذیل جملوں سے اسم <sup>جملے</sup> لغت انگ کر کے لکھیں۔

۱۔ ساجوہ خوبصورت لڑکی ہے۔  
\_\_\_\_\_

۲۔ یہ پیلا رومال ہے۔  
\_\_\_\_\_

۳۔ یہ گھوڑا شگرا ہے۔  
\_\_\_\_\_

۴۔ عامر امان دار آفسیر ہے۔  
\_\_\_\_\_


۵۔ بھارت خود غرض ملک ہے۔  
\_\_\_\_\_

س۔ دنوں کے نام لکھیں

پیر . \_\_\_\_\_ بدھ . \_\_\_\_\_

جمعہ . \_\_\_\_\_ اتوار . \_\_\_\_\_

منگل . \_\_\_\_\_ جمعرات . \_\_\_\_\_



**Computer**  
Subject





MONITOR

MOUSE

KEYBOARD

CPU

1. Tick (✓) the correct answer.

1. Computer is a \_\_\_\_\_

a. machine     b. furniture     c. man

2. Computer works very \_\_\_\_\_.

a. slow     b. fast     c. none

3. Which of the following is a machine used to keep things cool?

a.      b.      c. 

4. Which of the following is a computer?

a.      b.      c. 

5. Which of the following machines is found inside the house?

a.      b.      c. 



1. Name the three types of computers.
2. Write any four places where computers are used.
3. Name the main parts of a computer.
4. Which part of a computer is known as the brain of the computer?
5. Fill in the blanks:
  - a. Mouse is also known as a \_\_\_\_\_.
  - b. Microphone is an \_\_\_\_\_ device.
  - c. \_\_\_\_\_ is an output device.
  - d. A \_\_\_\_\_ is used to do calculations in the computer.
  - e. \_\_\_\_\_ key is used to type capital letters.
  - f. Monitor is an \_\_\_\_\_ device.



Enjoy  
Summer  
Holiday